

Progress check

Year 6

Mathematics

Paper 1: arithmetic

First name						
Middle name						
Last name						
Date of birth	Day		Month		Year	
Teacher						

Published Summer 2016

These assessments have been designed by the White Rose Maths Hub.
For more information, please visit www.whiterosemathshub.co.uk

[BLANK PAGE]

Please do not write on this page.

Instructions

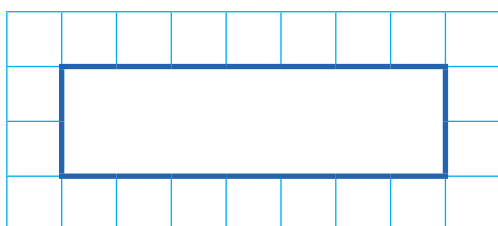
You **may not** use a calculator to answer any questions in this test.

Questions and answers

You have **20 minutes** to complete this test.

Work as quickly and as carefully as you can.

Put your answer in the box for each question.

A grid consisting of 10 columns and 5 rows of small squares. A larger rectangle is drawn inside the grid, spanning 6 columns and 2 rows, intended for writing an answer.

If you cannot do one of the questions, **go on to the next one**.

You can come back to it later, if you have time.

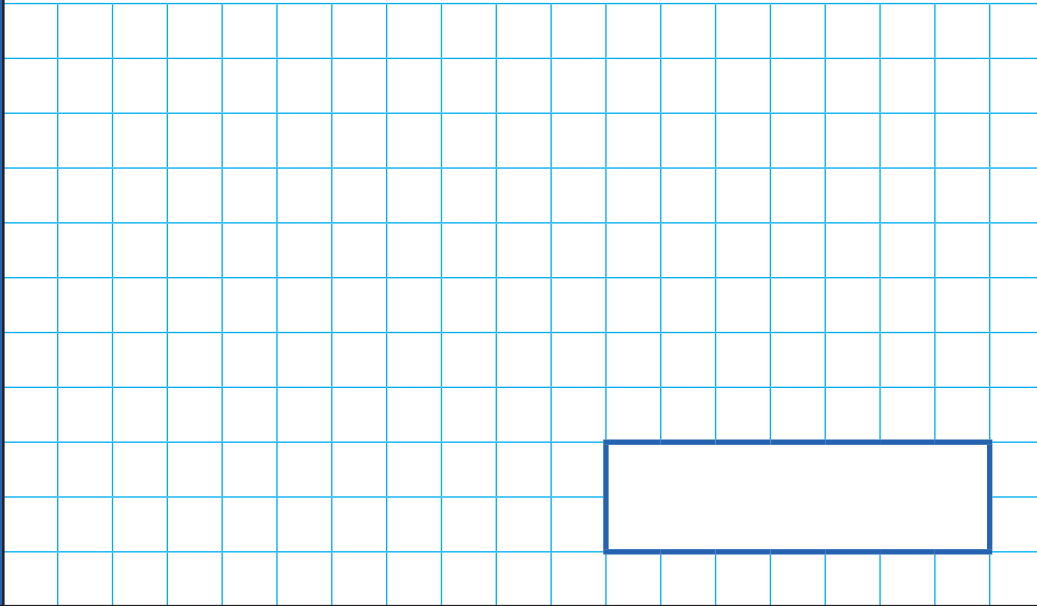
If you finish before the end, **go back and check your work**.

Marks

The number under each box at the side of the page tells you the maximum number of marks for each question.

1

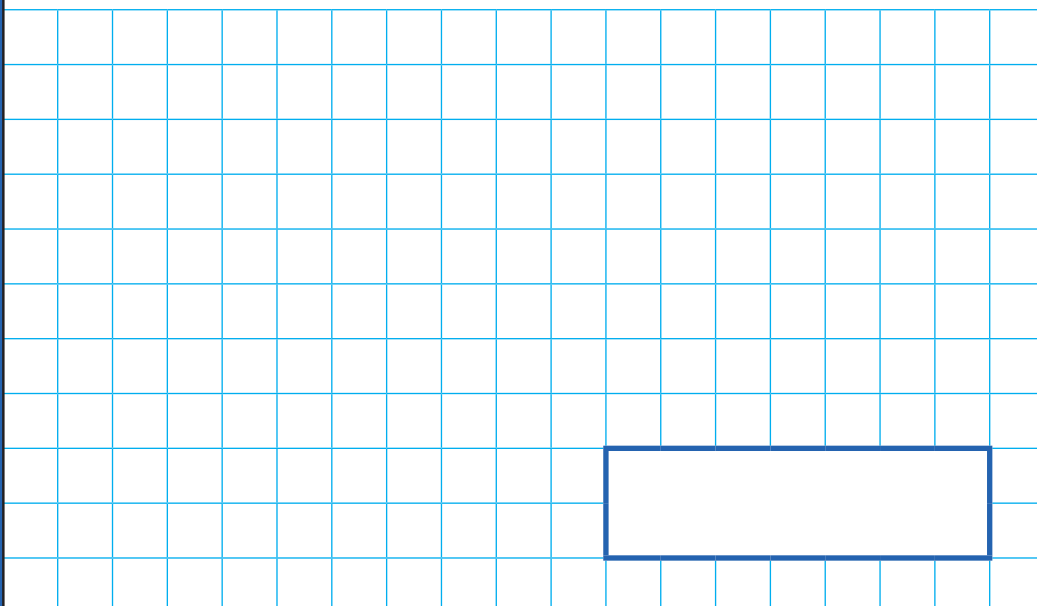
$$3,350 + 4,652 =$$



1 mark

2

$$327 \div 100 =$$



1 mark

3

$$22,964 - 7,483 =$$

1 mark

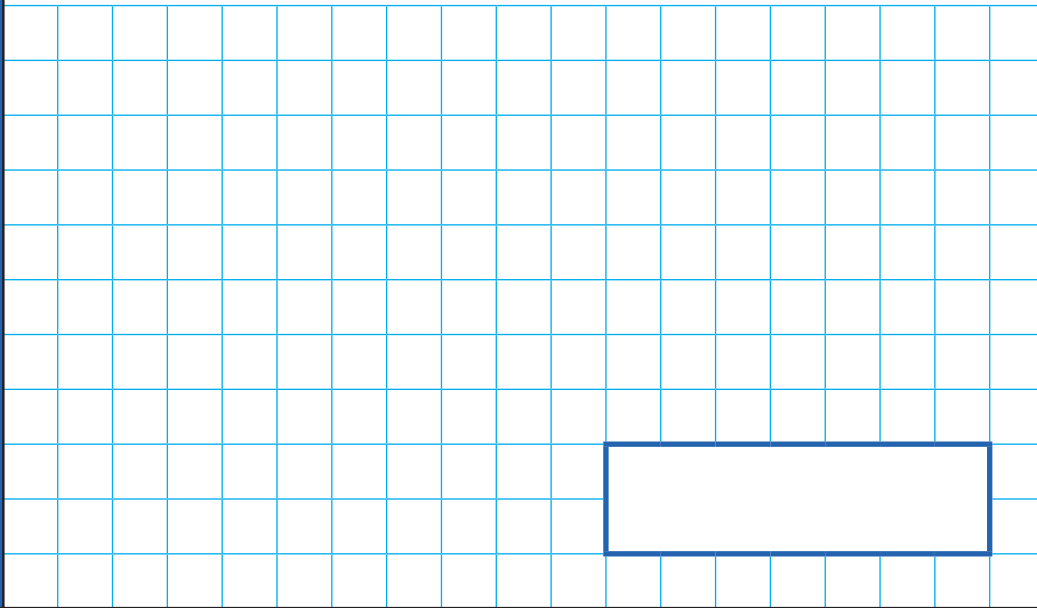
4

$$135 \times 4 =$$

1 mark

7

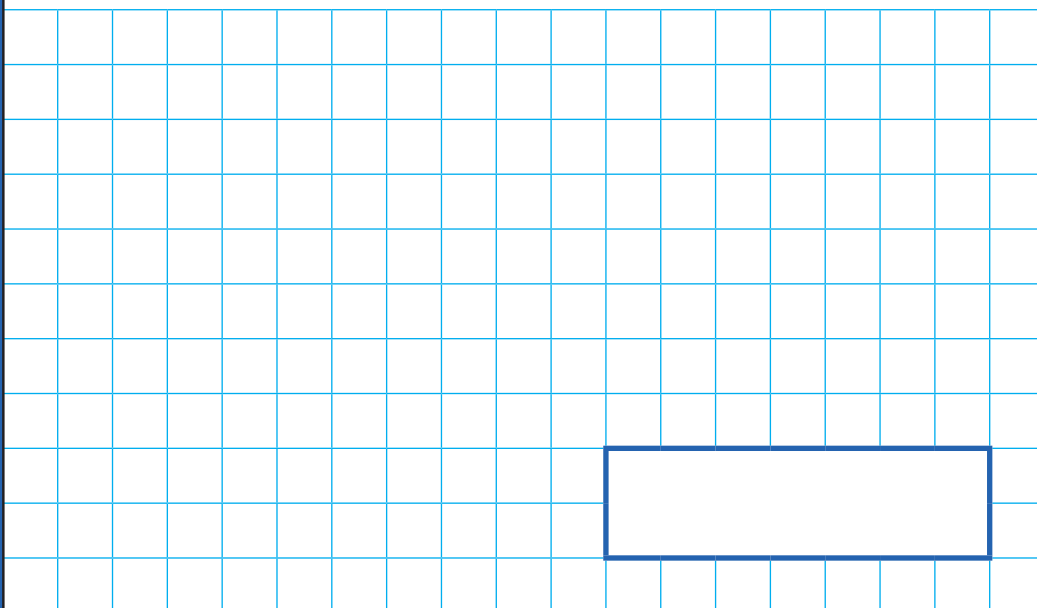
$$7,548 \div 6 =$$



1 mark

8

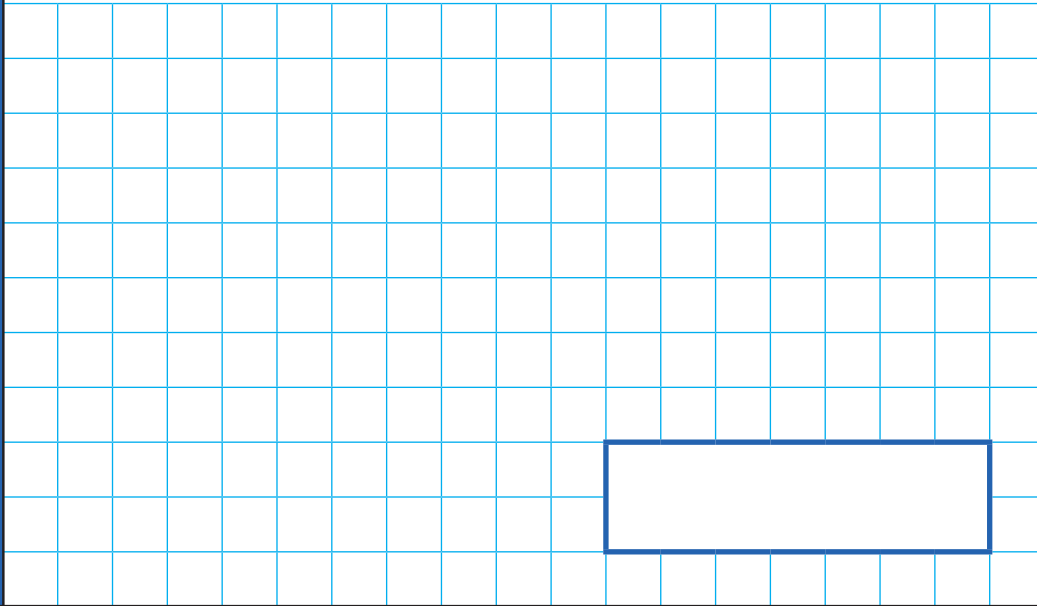
$$3.5 + 1.5 \times 10 =$$



1 mark

9

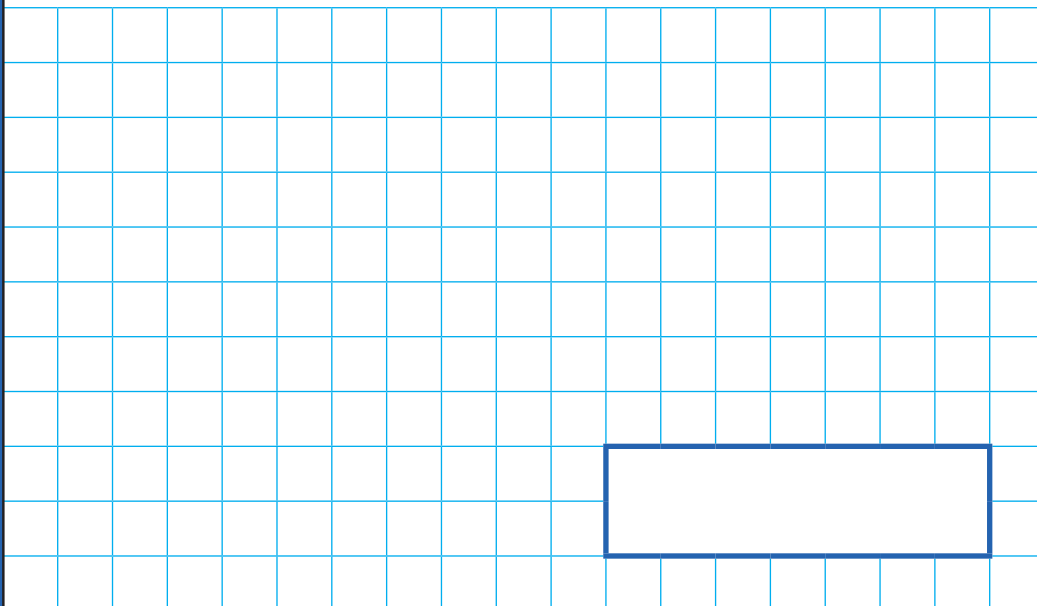
$$\frac{8}{9} - \frac{2}{3} =$$



1 mark

10

$$\frac{3}{4} \times 6 =$$



1 mark

11

$$72 \times 17 =$$

2 marks

12

$$27.26 - 18.5 =$$

1 mark

13

30% of 430 =

1 mark

14

2.7 kg – = 1,450 g

2 marks

15

3 hours 41 minutes + = 450 minutes

2 marks


16

12% of 5,500 =

1 mark

17

$$\frac{1}{8} \times \frac{2}{5} =$$



1 mark

[BLANK PAGE]

Please do not write on this page.

[BLANK PAGE]

Please do not write on this page.

[BLANK PAGE]

Please do not write on this page.

[BLANK PAGE]

Please do not write on this page.